


Math 2200-01 (Calculus I) Spring 2020

Book 1



Calculus I: Single-variable calculus $y=f(x)$ for example (one input variable x , one output variable). Derivatives (rates of change): differential calculus. Jan 27

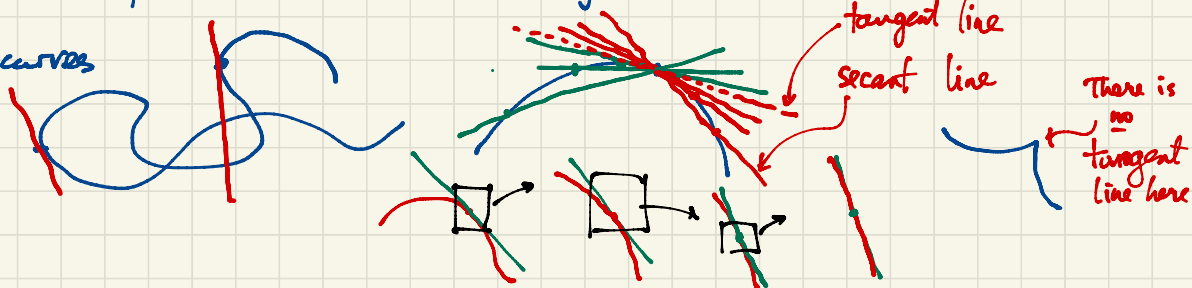
Calculus II: also single-variable. Integral calculus.

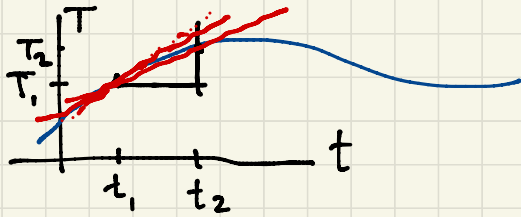
Calculus III: multivariable i.e. several input variables and/or several output variables
eg. position $(x(t), y(t), z(t))$ of an object at time t : one input t , three output variables $x(t), y(t), z(t)$.

Eg. Temperature in this room as a function of position $T(x, y, z)$
(three inputs x, y, z ; one output T)

Eg. Wind velocity as a function of position: three inputs x, y, z ; three outputs are the components of wind velocity. Jan 28

Tangent lines to curves





Temperature T as a function of time t

During the time interval $[t_1, t_2]$ i.e. $t_1 \leq t \leq t_2$ the temperature rises from T_1 to T_2 .

The average rate of change of temperature during this time interval is

$$\frac{\Delta T}{\Delta t} = \frac{T_2 - T_1}{t_2 - t_1} \leftarrow \begin{array}{l} \text{change in temperature} \\ \text{time elapsed.} \end{array} = \text{slope of the secant line from } (t_1, T_1) \text{ to } (t_2, T_2) \text{ on the graph.}$$

We want to understand the instantaneous rate of change of temperature at time t_1 . To determine this, first consider the average rate of change over smaller and smaller time intervals $[t_1, t_2]$ where we take $t_2 \rightarrow t_1$ (t_2 gets closer and closer to t_1).

Jan 29

Ex. t_2 $\frac{T_2 - T_1}{t_2 - t_1}$ In my example, $t_1 = 3$.

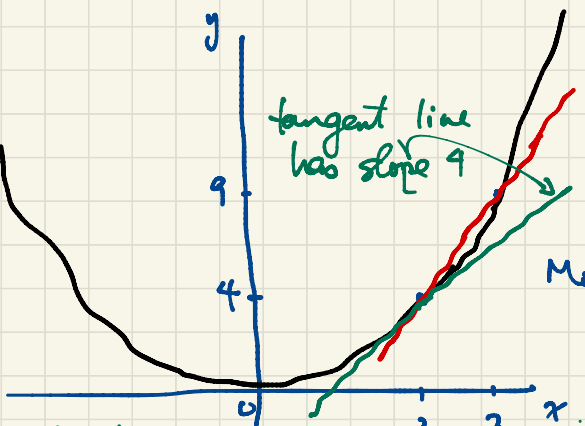
t_2	$\frac{T_2 - T_1}{t_2 - t_1}$	degrees/hour
4	2	
3.2	2.17	
3.1	2.19	
3.001	2.197	
2.9	2.209	
2.7	2.25	
2	2.31	

the limit is 2.2.
(The temperature at 3pm is changing at a rate of 2.2 degrees per hour.)

We write $\lim_{t_2 \rightarrow 3} \frac{T_2 - T_1}{t_2 - t_1} = 2.2$

(the limit of $\frac{T_2 - T_1}{t_2 - t_1}$ is 2.2 as t_2 approaches 3).

A second example using a polynomial function $y = f(x) = x^2$. Find the rate of change of y with respect to x at $x=2$.



The secant line joining the points $(2, 4)$ and $(3, 9)$ on the curve has slope

$$\frac{\Delta y}{\Delta x} = \frac{9-4}{3-2} = 5.$$

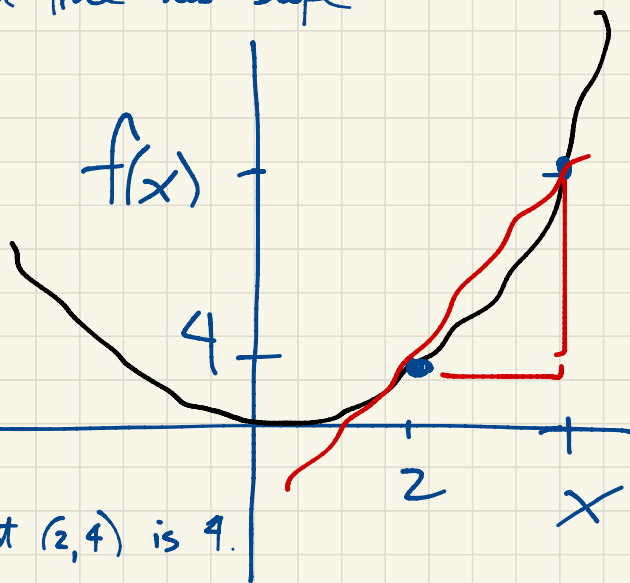
More generally, if we join the points $(2, 4)$ and $(x, f(x))$ on the curve, the secant line has slope

$$\frac{\Delta y}{\Delta x} = \frac{f(x) - f(2)}{x - 2}$$

Based on the table of values we guess that

$$\lim_{x \rightarrow 2} \frac{f(x) - f(2)}{x - 2} = 4.$$

i.e. the slope of the tangent line to the graph at $(2, 4)$ is 4.



the tangent line at $(2, 4)$ is

$$y - 4 = 4(x - 2) \text{ i.e.}$$

$$y = 4x - 4.$$

$$\frac{f(x) - f(2)}{x - 2}$$

x	$\frac{f(x) - f(2)}{x - 2}$
3	5
2.5	4.5
2.1	4.1
2.01	4.01
1.99	3.99
1.9	3.9
1.5	3.5
1	3

If a function has a sufficiently nice formula e.g. polynomial, then we have algebraic rules that provide definite ways to evaluate limits, eliminating guesswork based on the graph or table of values.

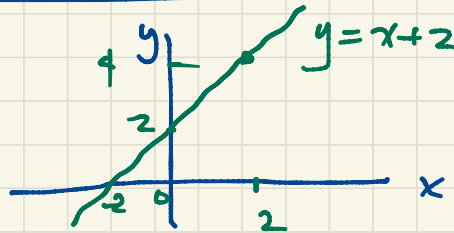
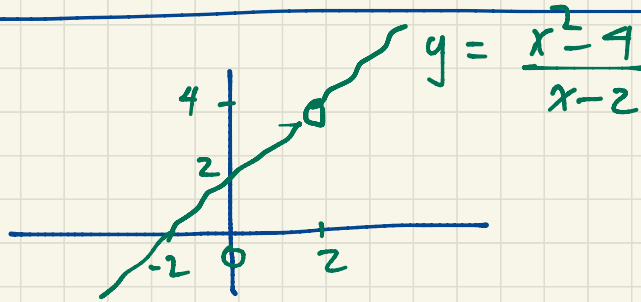
Ex. Find the slope of the tangent line to the graph of $y=x^2$ at $(2,4)$.

Solution The secant line from $(2,4)$ to $(x, f(x)) = (x, x^2)$ has slope

$$\frac{\Delta y}{\Delta x} = \frac{x^2 - 4}{x - 2} = \frac{(x+2)(x-2)}{x-2} = x+2 \quad \text{for } x \neq 2.$$

The slope of the tangent line is

$$\lim_{x \rightarrow 2} \frac{x^2 - 4}{x - 2} = \lim_{x \rightarrow 2} (x+2) = 2+2 = 4.$$



Both of these functions satisfy $\lim_{x \rightarrow 2} f(x) = 4$

Jan 31

$$f(x) = \frac{x^3 - 8}{4(x-2)}$$

The hole in the graph at $x = 2$ indicates that the function is undefined at this point.

$$\lim_{x \rightarrow 2} f(x) = \lim_{x \rightarrow 2} \frac{x^3 - 8}{4(x-2)} = 3$$

Feb 10

Compare: Friday's quiz

$$\lim_{x \rightarrow 3} \frac{1}{(x-3)^2} = \infty$$

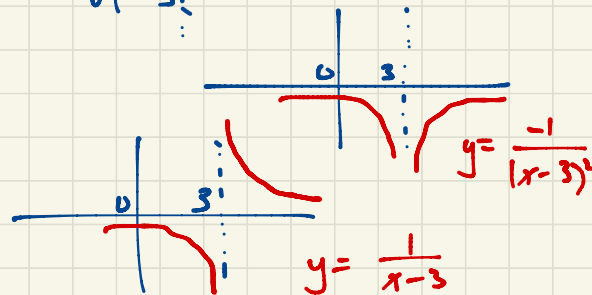
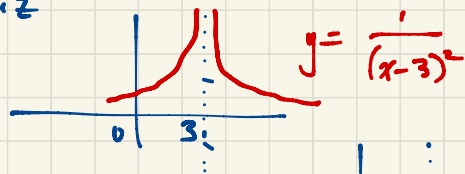
$$\lim_{x \rightarrow 3} \frac{-1}{(x-3)^2} = -\infty$$

$\lim_{x \rightarrow 3} \frac{1}{x-3}$ does not exist

$$\lim_{x \rightarrow 3^+} \frac{1}{x-3} = \infty$$

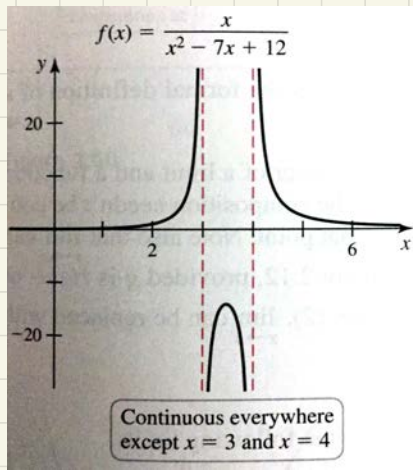
$$\lim_{x \rightarrow \infty} \frac{1}{x-3} = 0$$

$$\lim_{x \rightarrow -\infty} \frac{1}{x-3} = 0$$



$$\lim_{x \rightarrow 3^-} \frac{1}{x-3} = -\infty$$

Sec 2.6



A function f is continuous at a if $\lim_{x \rightarrow a} f(x) = f(a)$.

Explicitly, this requires that

- (i) f must be defined at a , i.e. $f(a)$ exists;
- (ii) f must have a limit at a ; and
- (iii) The values in (i) and (ii) must agree.

Eg. for the function f on the right,

- f is discontinuous at 5;
- $f \dots \dots \dots 3$.

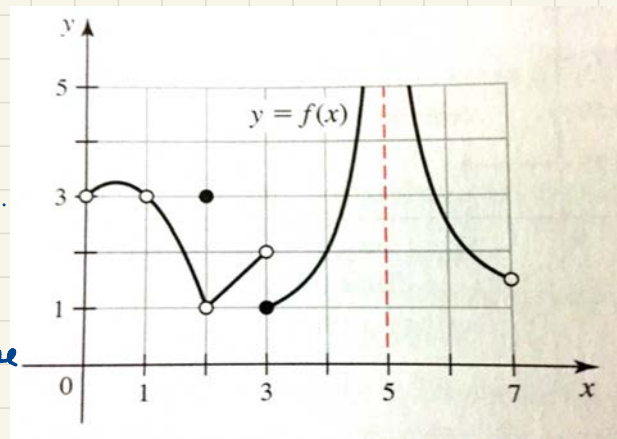
$f(3) = 1$, $\lim_{x \rightarrow 3} f(x)$ does not exist.

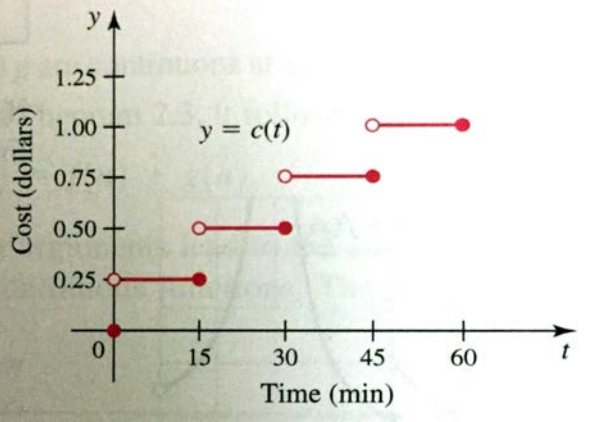
- f is not continuous at 2.

$f(2) = 3$, $\lim_{x \rightarrow 2} f(x) = 1$ but these two values do not agree!

- f is discontinuous at 1. Although $\lim_{x \rightarrow 1} f(x) = 3$, f is not defined at 1.

f is continuous on $(0, 7)$ i.e. $0 < x < 7$ except at 1, 2, 3, 5.





Eg. the cost of parking at a meter is 25¢ for each 15 minutes. The cost $c(t)$ as a function of time is discontinuous at $t = 0, 15, 30, 45, 60, \dots$. At each of these points of discontinuity, c is left-continuous (i.e. $\lim_{t \rightarrow a^-} f(t) = f(a)$) but not right-continuous (i.e. $\lim_{t \rightarrow a^+} f(t) \neq f(a)$).